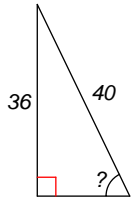


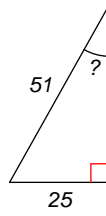
## Right angled Trigonometry

Find the measure of the indicated angle to the nearest degree.

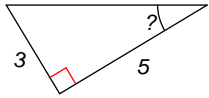
1)



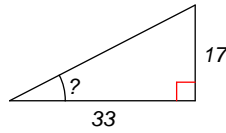
2)



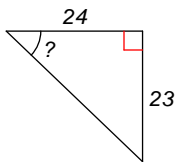
3)



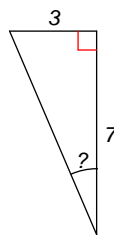
4)



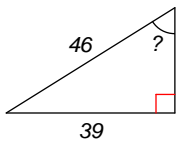
5)



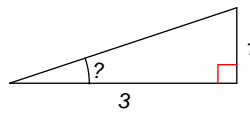
6)



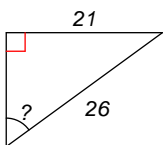
7)



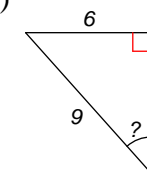
8)



9)



10)



## Answers to Right angled Trigonometry

- 1)  $64^\circ$
- 5)  $44^\circ$
- 9)  $54^\circ$

- 2)  $29^\circ$
- 6)  $23^\circ$
- 10)  $42^\circ$

- 3)  $31^\circ$
- 7)  $58^\circ$

- 4)  $27^\circ$
- 8)  $18^\circ$